







# 1 なかまづくりと かず①


ね ん		く み		な ま え	
--------	--	--------	--	-------------	--

1 えの かずだけ みぎの ○に いろをぬりましょう。


<p>(1)</p> 	
<p>(2)</p> 	
<p>(3)</p> 	

2 えの あう かずを □に かきましょう。


(1)



(2)




(3)

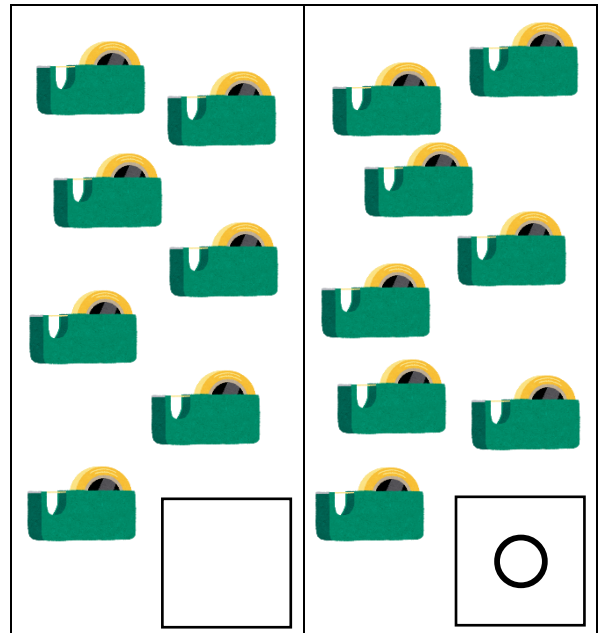


3 どちらが おおいですか。おおいほうに ○を つけましょう。

(1)



(2)



4 いちばん おおきい かずに ○を つけましょう。

(1)  $\boxed{6} \cdot \cdot \cdot \cdot \cdot \boxed{3}$

(2)  $\boxed{8} \cdot \cdot \cdot \cdot \cdot \boxed{9} \cdot \cdot \cdot \cdot \cdot \boxed{7}$

(3)  $\boxed{3} \cdot \cdot \cdot \cdot \cdot \boxed{5} \cdot \cdot \cdot \cdot \cdot \boxed{8}$

5 かずの かあどを じゅんばんに ならべます。あいている かあどに かずをかきましょう。

(1)  $\boxed{1} \text{ --- } \boxed{2} \text{ --- } \boxed{3} \text{ --- } \boxed{4} \text{ --- } \boxed{5} \text{ --- } \boxed{6} \text{ --- } \boxed{7}$

(2)  $\boxed{5} \text{ --- } \boxed{4} \text{ --- } \boxed{3} \text{ --- } \boxed{2} \text{ --- } \boxed{1} \text{ --- } \boxed{0}$

(3)  $\boxed{2} \text{ --- } \boxed{4} \text{ --- } \boxed{6} \text{ --- } \boxed{8} \text{ --- } \boxed{10}$